

Lab # 1: The Densities of Solids and Liquids

The density of a material may be defined as mass per unit volume. The units generally used for solids and liquids are g/mL, for gases g/L. The density values of some solids, liquids and gases near room temperature are listed below (Table 1).

Substance	Density at 20°C
air	1.29 g/L
ethanol	0.7893 g/mL
acetone	0.7899 g/mL
water	1.0000 g/mL (4°C)
methanol	0.7928 g/mL
octane	0.7028 g/mL
glycerol	1.2613 g/mL
mercury	13.5939 g/mL

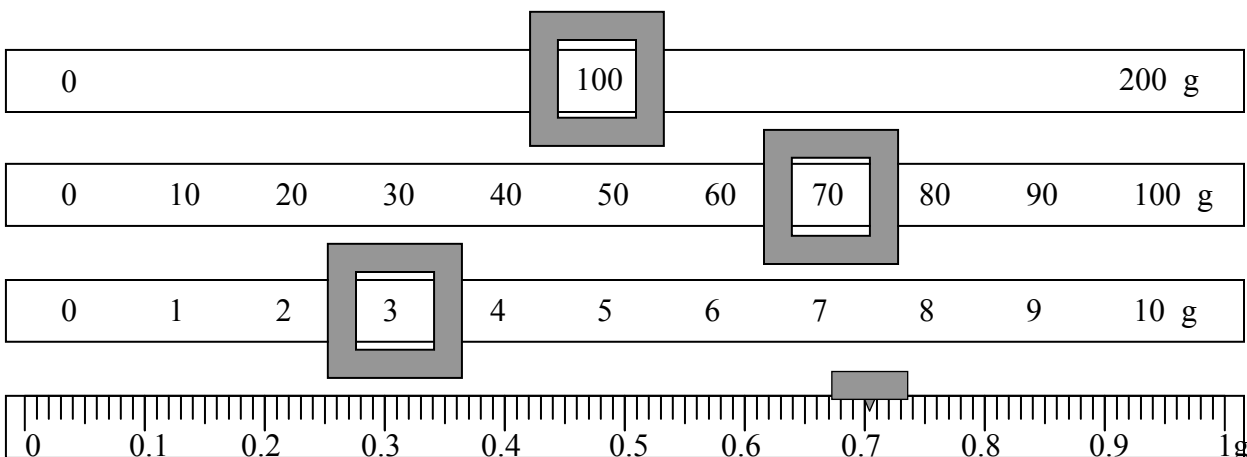
Substance	Density at 20°C
titanium	4.54 g/mL
gold	19.3 g/mL
iridium	22.65 g/mL
sodium	0.968 g/mL
iron	7.86 g/mL
nickel	8.90 g/mL
silicon	2.33 g/mL (25°C)
diamond	3.513 g/mL (25°C)

The densities of solids and liquids change slightly with temperature, in general, decreasing with increasing temperature. This can be explained by the change in volume with temperature, since the mass of a material does not depend on temperature. The density of gases varies greatly with temperature, since the volume of gases may vary considerably with temperature.

The mass of the material may be found in the laboratory by the use of a balance. Because of common convention, the mass determined will be called weight. The volume of a liquid material may be accurately obtained by the use of a pipet, whose volume may be exactly reproduced from experiment to experiment. Solid volumes may be determined by direct measurement if the solid has a regular geometric shape. The volume of irregularly shaped solids may be determined by measuring the amount of liquid that is displaced when the solid is placed in a liquid. This assumes, of course, that the solid neither reacts with the liquid nor floats in it.

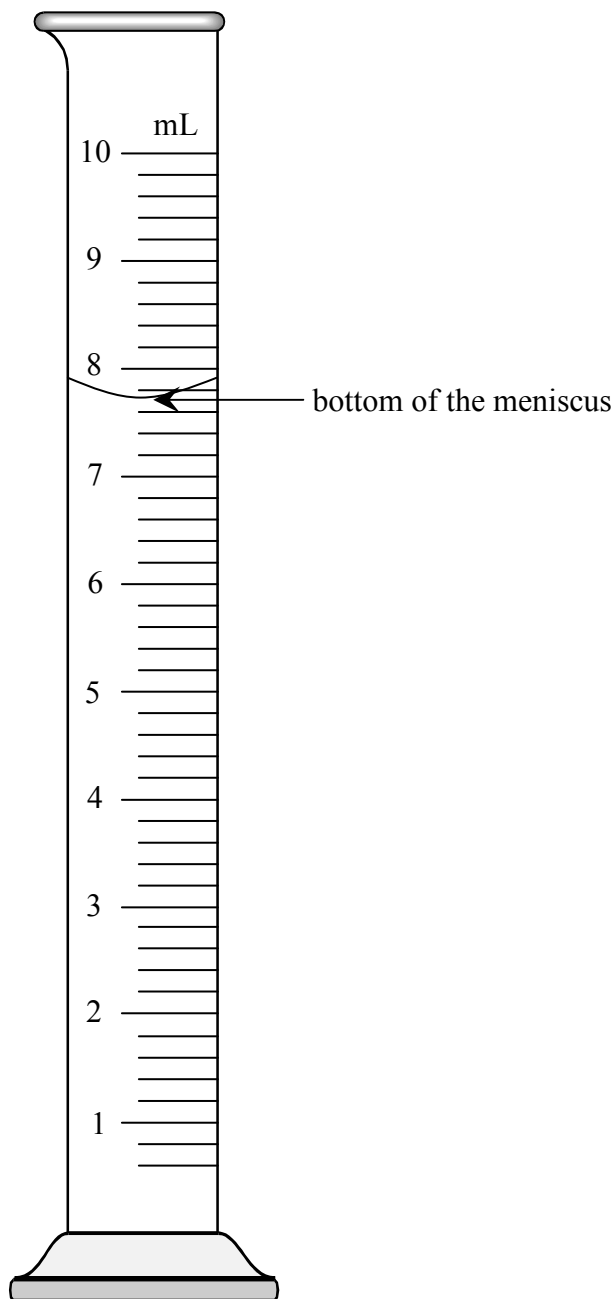
Reading a High-Form Balance

All measurements made on the high-form balance should be made to the thousandth of a gram. That is, all the masses must have three digits after the decimal point. The idealized balance below shows a mass of 173.704 g.



Lab # 1: The Densities of Solids and LiquidsReading a Graduated Cylinder

The 10 mL graduated cylinder you will use typically can be read to 0.02 mL. Each reading from it must therefore have two digits after the decimal point. The volume must be read from the bottom of the meniscus, shown in the picture below by the arrow. The idealized graduated cylinder below contains a volume of 7.72 mL. (If your graduated cylinder is different from the one pictured below, see the instructor.)



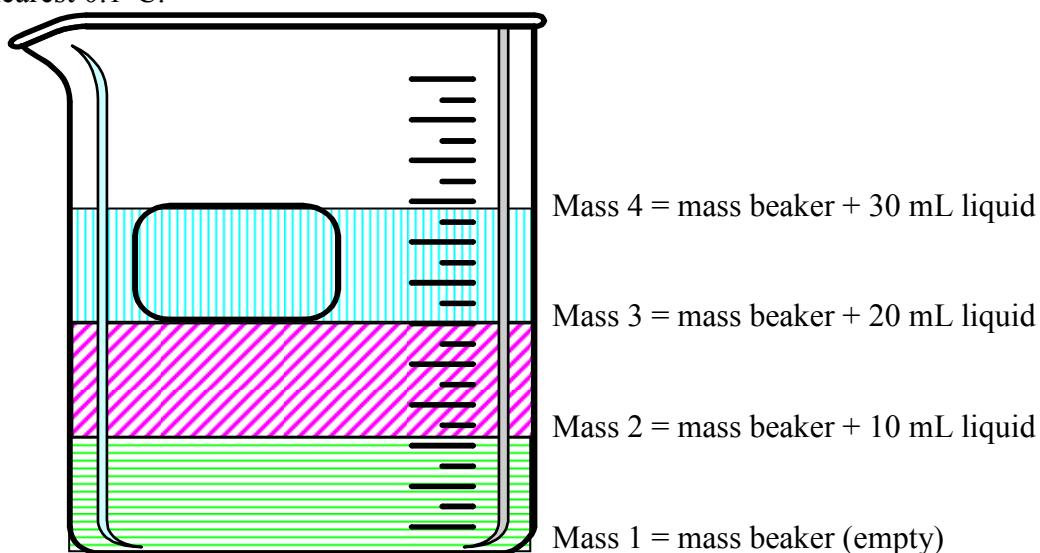
Lab # 1: The Densities of Solids and Liquids**Table 2: Absolute Density of Water (g/mL)**

Degrees	0.0	0.1	0.2	0.3	0.4	0.5	0.6	0.7	0.8	0.9
0	0.999841	847	854	860	866	872	878	884	889	895
1	900	905	909	914	918	923	927	930	934	938
2	941	944	947	950	953	955	958	960	962	964
3	965	967	968	969	970	971	972	972	973	973
4	973	973	973	972	972	972	970	969	968	966
5	965	963	961	959	957	955	952	950	947	944
6	941	938	935	931	927	924	920	916	911	907
7	902	898	893	888	883	877	872	866	861	855
8	849	843	837	830	824	817	810	803	796	789
9	781	774	766	758	751	742	734	726	717	709
10	700	691	682	673	664	654	645	635	625	615
11	605	595	585	574	564	553	542	531	520	509
12	498	486	475	463	451	439	427	415	402	390
13	377	364	352	339	326	312	299	285	272	258
14	244	230	216	202	188	173	159	144	129	114
15	099	084	069	054	038	023	007	*991	*975	*959
16	0.998943	926	910	893	877	860	843	826	809	792
17	774	757	739	722	704	686	668	650	632	613
18	593	576	558	539	520	501	482	463	444	424
19	405	385	365	345	325	305	285	265	244	224
20	203	183	162	141	120	099	073	056	035	013
21	0.997992	970	948	926	904	882	860	837	815	792
22	770	747	724	701	678	655	632	608	585	561
23	538	514	490	466	442	418	394	369	345	320
24	296	271	246	221	196	171	146	120	095	069
25	044	018	*992	*967	*941	*914	*888	*862	*836	*809
26	0.996783	756	729	703	676	649	621	594	567	540
27	512	485	457	429	401	373	345	317	289	261
28	232	204	175	147	118	089	060	031	002	*973
29	0.995944	914	885	855	826	796	766	736	706	676
30	646	616	586	555	525	494	464	433	402	371

Each value from this table is good to six significant figures. For example, the density of water at 17.7°C is 0.998650 g/mL. The last 3 digits come from the 650 in the box at 17.7 and the first 3 digits come from the 0.998 in the box at 16.0 (the closest value before the desired temperature that shows all 6 digits).

Lab # 1: The Densities of Solids and Liquids**EXPERIMENTAL PROCEDURE:**

Density of Liquids: (See figure below) Weigh a small, clean beaker and record the weight (Mass 1). Stop and get the instructor to check your measurement. Obtain an unknown liquid and record the unknown number. Pipet 10.00 mL of the unknown liquid into the beaker. Weigh the liquid and the beaker (Mass 2). Pipet another 10.00 mL of liquid into the beaker and weigh (Mass 3). Pipet a third 10.00 mL sample of liquid into the beaker and weigh (Mass 4). Return the liquid to the bottle. Rinse the beaker and reweigh. Rinse the pipet several times with distilled water. As with the unknown liquid, pipet three 10.00 mL aliquots of distilled water into the beaker, weighing after each 10.00 mL portion. Measure the temperature of the water to the nearest 0.1°C.



Density of a Solid: Obtain an unknown metal sample and record the unknown number. Clean and dry a 10 mL graduated cylinder. Add approximately 5 mL of distilled water to the cylinder and record the water level to 0.02 mL (2 digits after the decimal point). Record the mass (to 3 digits after the decimal point) of the water and the cylinder. Stop and get the instructor to check your measurements. Carefully, to avoid splattering, add metal to the water until one-third of the sample is used or the level of the water reaches about 9.5 mL, whichever comes first. The metal must be completely submerged and the water level must not exceed 10 mL. Record the new volume of water and metal and the new mass of water, metal and graduated cylinder. Carefully pour the water out of the graduated cylinder, making sure you do not pour any metal down the drain. Pour the wet metal onto a paper towel. Repeat the volume and mass measurements with the metal until you have three sets. Return all the wet metal to the original bottle.

Lab #1: The Densities of Solids and Liquids**DATA AND CALCULATIONS****Density of Liquids**

	<u>Trial 1</u>	<u>Trial 2</u>	<u>Trial 3</u>
Unknown # of liquid	_____		
Mass of beaker (g)	_____		
	(Mass 1)		
Mass of beaker & liquid (g)	_____	_____	_____
	(Mass 2)	(Mass 3)	(Mass 4)
Mass of 10.00 mL of liquid (g)	_____	_____	_____
	(Mass 2 – Mass 1)	(Mass 3 – Mass 2)	(Mass 4 – Mass 3)
Density of liquid (g/mL)	_____	_____	_____
Average density of liquid	_____		
Mass of beaker (g)	_____		
	(Mass 1w)		
Mass of beaker & water (g)	_____	_____	_____
	(Mass 2w)	(Mass 3w)	(Mass 4w)
Mass of 10.00 mL of water (g)	_____	_____	_____
	(Mass 2w – Mass 1w)	(Mass 3w – Mass 2w)	(Mass 4w – Mass 3w)
Density of water (g/mL)	_____	_____	_____
Average density of water	_____		
Temperature of water (°C)	_____		
Density of water from Table 2	_____		

NAME _____

General Chemistry I (FC, 09 - 10)

Lab #1: The Densities of Solids and Liquids

What is the percent error of the density of the water? $\left(\% \text{ error} = \frac{|\text{actual} - \text{experimental}|}{\text{actual}} \times 100 \right)$

Density of a Solid

Unknown # _____

	<u>Trial 1</u>	<u>Trial 2</u>	<u>Trial 3</u>
Volume of water (mL)	_____	_____	_____
Volume of water & metal (mL)	_____	_____	_____
Volume of metal (mL)	_____	_____	_____
Mass of water & cylinder (g)	_____	_____	_____
Mass of water, cylinder & metal (g)	_____	_____	_____
Mass of metal (g)	_____	_____	_____
Density of metal (g/mL)	_____	_____	_____
Average density (g/mL)	_____		

Instructor's Initials _____

Lab #1: The Densities of Solids and Liquids**The Electronic Balance**

There are several ways to use the electronic balances to weigh out materials. You will try three different methods. The last two make use of the tare feature of the balances and are the methods with which you should become most familiar.

When given an amount of a material to be measured, unless there are specific directions as to a minimum or maximum amount, you can generally differ by about 5% in either direction. For example, when you are asked to weigh 2 g of a substance, do not waste your time trying to get 2.000 g. Five percent of 2 g is 0.1 g so weigh out between 1.9 g and 2.1 g. Make sure that you record ALL the digits that the balance gives you. (For less than 60 g on the balance pan, you should have three digits after the decimal point. For more than 60 g, you will only have two.)

A. DIRECT WEIGHING WITHOUT USING THE TARE BUTTON

Use either a plastic weighing boat or a piece of weighing paper.

1. Weigh the weighing boat or paper. Record the mass. _____
2. Add 2 g of the salt to the boat or paper. Record the mass. _____
3. Subtract the mass of the boat from the mass of the salt and boat. _____

B. DIRECT WEIGHING USING THE TARE BUTTON

1. Weigh the weighing boat or paper. Hit the TARE button. The mass will be set to zero g.
2. Add 2 g of the salt to the boat or paper. Record the mass. _____

C. INDIRECT WEIGHING USING THE TARE BUTTON

1. Weigh the bottle of salt. Hit the TARE button.
2. Pour 2 g of the salt out of the bottle. In this case, pour out a small amount in the manner demonstrated by the instructor. Place the bottle back on the balance pan. The amount you have poured out will be the negative of the mass shown. Continue pouring until you have reached 2 g. Record the mass. _____

Before returning the salt to the bottle, show the instructor at least one of your weighed samples.

Lab #1: The Densities of Solids and Liquids**PRESTUDY**

1. (3) Using the Absolute Density of Water table, answer the following questions.

a. Does the density of water increase or decrease as the temperature decreases from 2.0 to 1.0°C?

b. Look up the densities of water at each of the following temperatures.

21.0°C _____ 17.3°C _____

2. (4) a. An empty graduated cylinder weighs 25.489 g. When the cylinder contains 45.3 mL of an unknown liquid, it weighs 57.847 g. What is the density of the unknown liquid? Show your work.

b. The unknown liquid from part a is octane; calculate the percent error of the density. Show your work.

$$\left(\% \text{ error} = \frac{|\text{theoretical value} - \text{experimental value}|}{\text{theoretical value}} \times 100 \right)$$

3. (3) A graduated cylinder is filled with 24.5 mL of water. After placing an unknown solid in the graduated cylinder, the water level rises to 31.9 mL. The mass of the cylinder and water before the solid was added was 49.989 g and after adding the solid, the mass is 119.993 g. Calculate the density of the solid. Show your work.